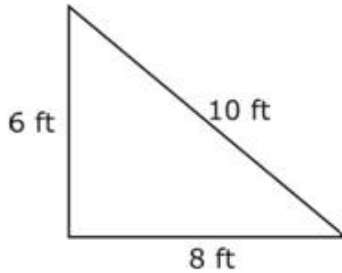


Name _____

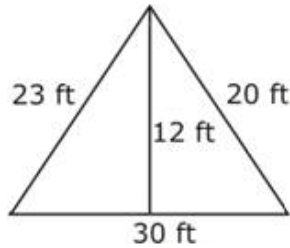
Date _____

Find the Area and Perimeter of Triangles

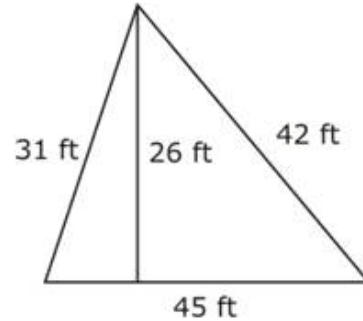
Using the given measurements, find the area and perimeter of each triangle.



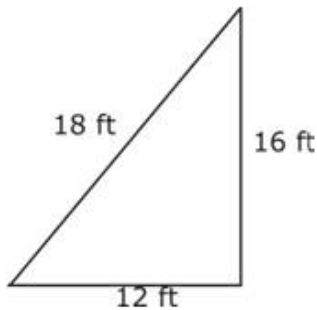
1. Area = ____
Perimeter = ____



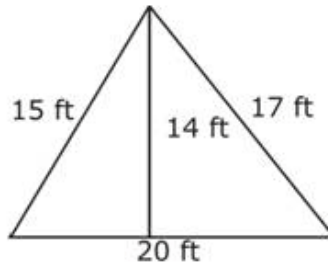
2. Area = ____
Perimeter = ____



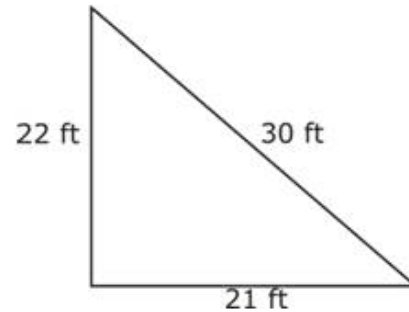
3. Area = ____
Perimeter = ____



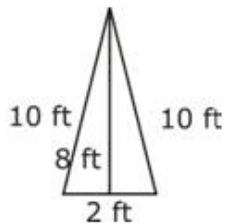
4. Area = ____
Perimeter = ____



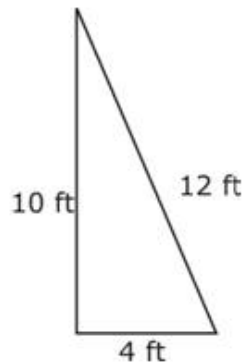
5. Area = ____
Perimeter = ____



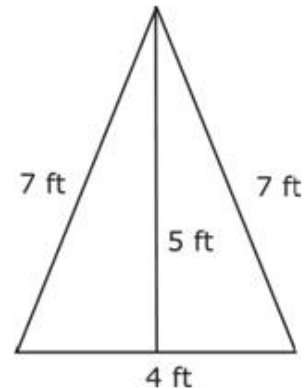
6. Area = ____
Perimeter = ____



7. Area = ____
Perimeter = ____



8. Area = ____
Perimeter = ____



9. Area = ____
Perimeter = ____

Name : _____

Score : _____

Teacher : _____

Date : _____

Find the length of the third side of each triangle.

