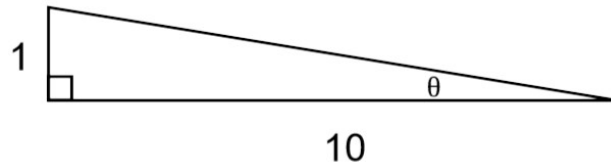
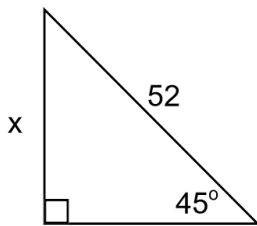


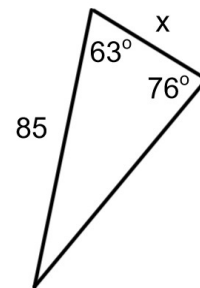
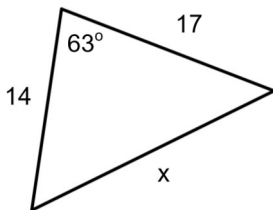
Quiz #4B – Trigonometry

[15 marks]

1. Solve for the indicated value in each triangle.



2. Solve for the indicated value in each triangle.



MPM 2D (Practice)
Mr. Kempe

Name: _____
Date: _____

3. A hiker is standing 25m from the base of a cliff, and estimates that the angle of elevation to the top of the cliff is 86° . Determine the height of the cliff.